
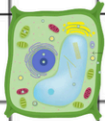
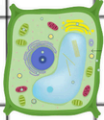
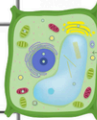

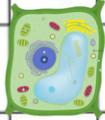

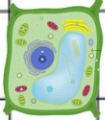
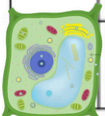


# Im Hunderterfeld

① Die Pflanzenzellen verdecken eine Zahl in jeder Zehnerreihe.

1		3	4	5	6	7	8	9	10
11	12	13	14	15	16		18	19	20
21	22	23		25	26	27	28	29	30
31	32	33	34	35	36	37	38	39	
41	42	43	44	45	46	47		49	50
51	52		54	55	56	57	58	59	60
61	62	63	64	65	66	67	68	69	70
71	72	73	74	75		77	78	79	80
81	82	83	84	85	86	87	88		90
	92	93	94	95	96	97	98	99	100

Schreibe die verdeckten Zahlen der Reihe nach auf.