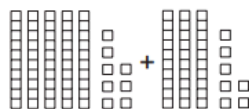
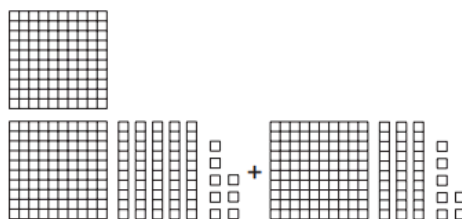


Halbschriftliches Addieren



$$\begin{array}{r} 58 + 37 = \\ \hline \end{array}$$



$$\begin{array}{r} 258 + 137 = \\ \hline \end{array}$$

① Rechne mit deinem Rechenweg! Schreibe auf!

$$\begin{array}{r} 342 + 29 = \\ \hline \end{array}$$

$$\begin{array}{r} 526 + 36 = \\ \hline \end{array}$$

$$\begin{array}{r} 467 + 76 = \\ \hline \end{array}$$

$$\begin{array}{r} 573 + 44 = \\ \hline \end{array}$$

$$\begin{array}{r} 247 + 87 = \\ \hline \end{array}$$

$$\begin{array}{r} 753 + 69 = \\ \hline \end{array}$$

$$\begin{array}{r} 434 + 88 = \\ \hline \end{array}$$

$$\begin{array}{r} 338 + 64 = \\ \hline \end{array}$$

$$\begin{array}{r} 589 + 54 = \\ \hline \end{array}$$

$$\begin{array}{r} 225 + 95 = \\ \hline \end{array}$$

$$\begin{array}{r} 729 + 76 = \\ \hline \end{array}$$

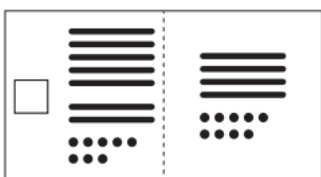
$$\begin{array}{r} 165 + 78 = \\ \hline \end{array}$$

$$\begin{array}{r} 436 + 83 = \\ \hline \end{array}$$

$$\begin{array}{r} 105 + 89 = \\ \hline \end{array}$$

$$\begin{array}{r} 248 + 66 = \\ \hline \end{array}$$


② Wie heißt die Plusaufgabe? Schreibe auf und löse in mehreren Schritten!



$$\begin{array}{r} 178 + 49 = \\ \hline \end{array}$$



$$\begin{array}{r} \\ \hline \end{array}$$



$$\begin{array}{r} \\ \hline \end{array}$$

③ Erfinde eigene Plusaufgaben mit Übergang!

$$\begin{array}{r} \\ \hline \end{array}$$

$$\begin{array}{r} \\ \hline \end{array}$$

$$\begin{array}{r} \\ \hline \end{array}$$