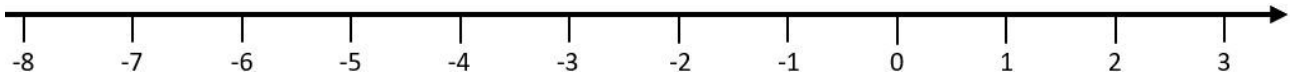
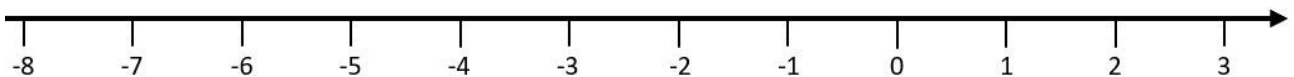


① Stelle die Aufgabe auf der Zahlengeraden dar und trage das Ergebnis ein.

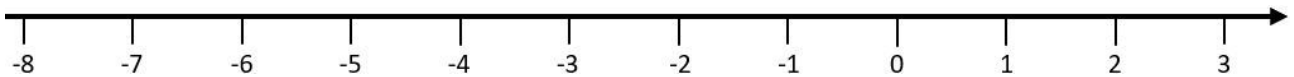
a) $-4 + 3 =$



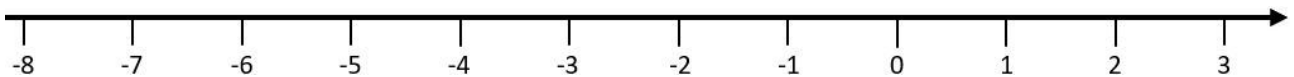
b) $-6 + 7 =$



c) $2 - 5 =$

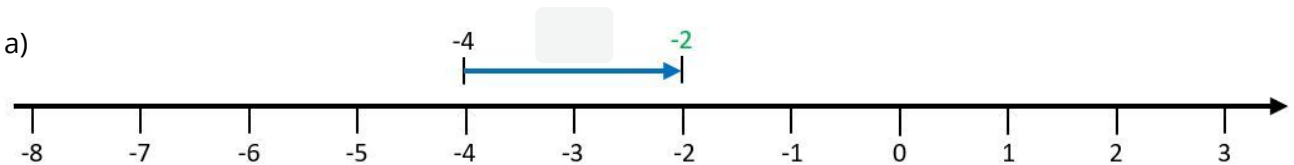


d) $-2 - 4 =$



② Ergänze die fehlende Angabe auf dem Pfeil.

a)



b)

