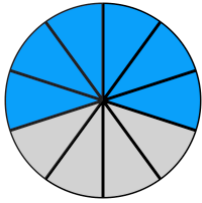
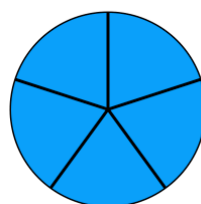
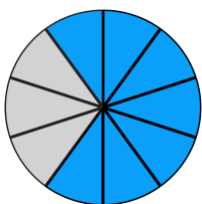
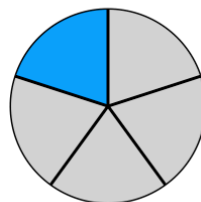
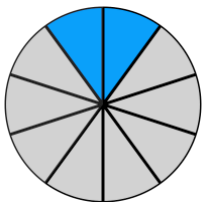
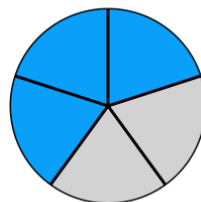
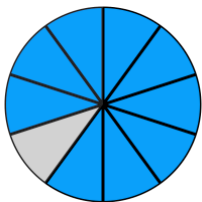
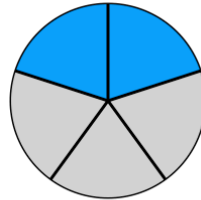
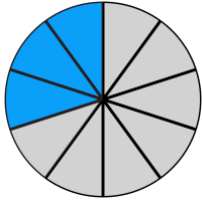
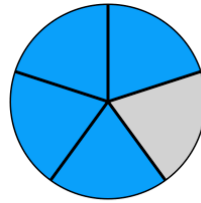


## ① Gib die Kuchenstücke in Prozent an.



$$\frac{6}{10} = \frac{60}{100} = 60\%$$



## ② Gib die Brüche in Prozent an.

a)  $\frac{3}{4} =$

b)  $\frac{2}{25} =$

c)  $\frac{1}{2} =$

d)  $\frac{4}{20} =$

e)  $\frac{8}{10} =$

f)  $\frac{13}{20} =$

g)  $\frac{1}{50} =$

g)  $\frac{1}{4} =$

h)  $\frac{22}{200} =$