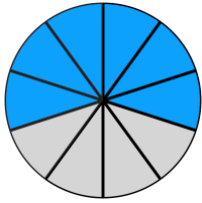
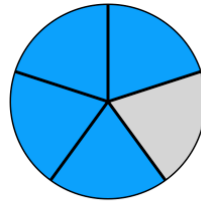
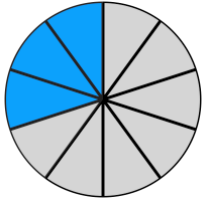


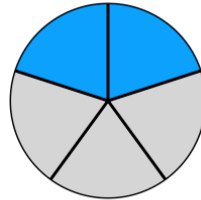
① Gib die Kuchenstücke in Prozent an.

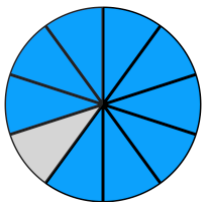


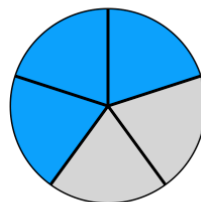
$$\frac{6}{10} = \frac{60}{100} = 60\%$$

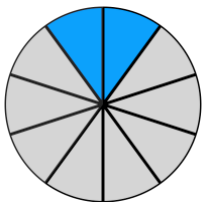


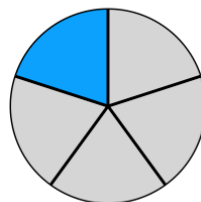


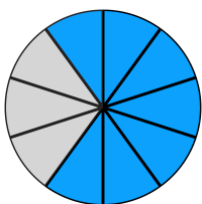


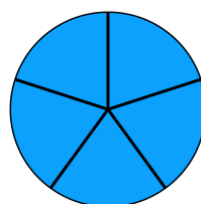












② Gib die Brüche in Prozent an.

a) $\frac{3}{4} =$

b) $\frac{2}{25} =$

c) $\frac{1}{2} =$

d) $\frac{4}{20} =$

e) $\frac{8}{10} =$

f) $\frac{13}{20} =$

g) $\frac{1}{50} =$

g) $\frac{1}{4} =$

h) $\frac{22}{200} =$