




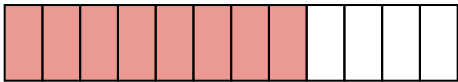

AB: Mit Brüchen umgehen

Mathematik Bruchrechnen M 6

① Welcher Bruch wird dargestellt? Kürze, wenn möglich.




$$\frac{4}{6} = \frac{2}{3}$$



② Färbe den Wert des Bruches ein.


$\frac{2}{3}$




$\frac{1}{4}$




$\frac{7}{15}$




$\frac{2}{3}$




$\frac{1}{6}$




$\frac{3}{6}$



$\frac{1}{1}$



$\frac{5}{9}$



$\frac{9}{14}$

