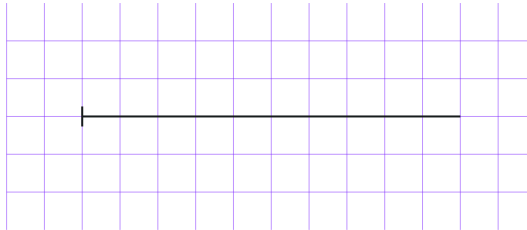




# INFO: Winkelarten

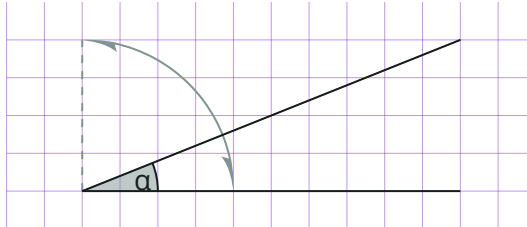
Mathematik Messen M 6

Folgende Winkelarten musst du kennen:



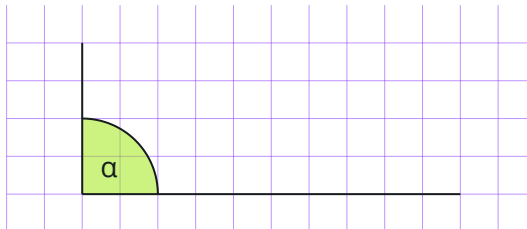
$$\alpha = 0^\circ$$

Nullwinkel



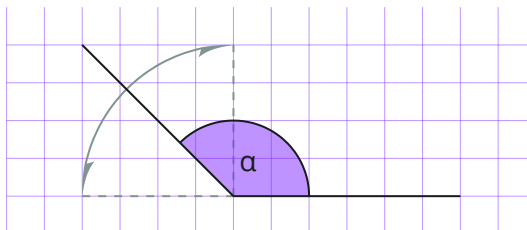
$$0^\circ < \alpha < 90^\circ$$

Spitzer Winkel



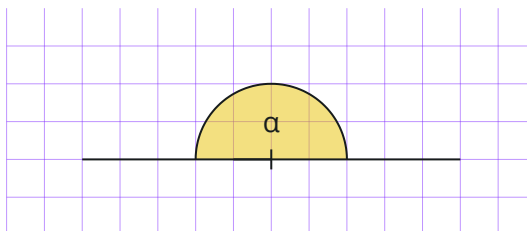
$$\alpha = 90^\circ$$

Rechter Winkel



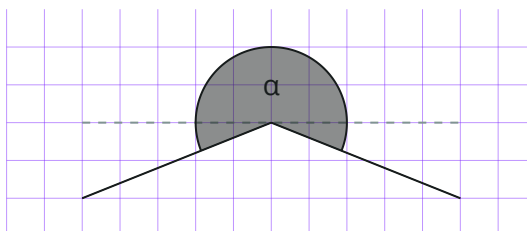
$$90^\circ < \alpha < 180^\circ$$

Stumpfer Winkel



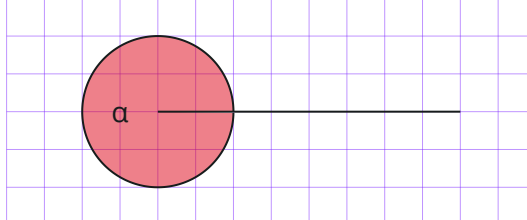
$$\alpha = 180^\circ$$

Gestreckte Winkel



$$180^\circ < \alpha < 360^\circ$$

Überstumpfer Winkel



$$\alpha = 360^\circ$$

Vollwinkel

